





Sample Cards Blue

Computation and  
Number Sense

This bar is 1 **zac** long.


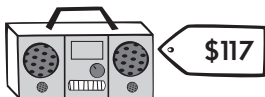



Estimate the length of these bars in **zacs**.



**HEAD  
SHARPENERS**

Look at these sale items.



Pretend you had a coupon for **5%-off** the marked price. Figure out how much you would **save** if you bought the

- camera.
- skateboard.
- in-line skates.
- watch.

