



Thinking Mathematically and Problem Solving

Sample Cards Green

Dan threw 3 beanbags.

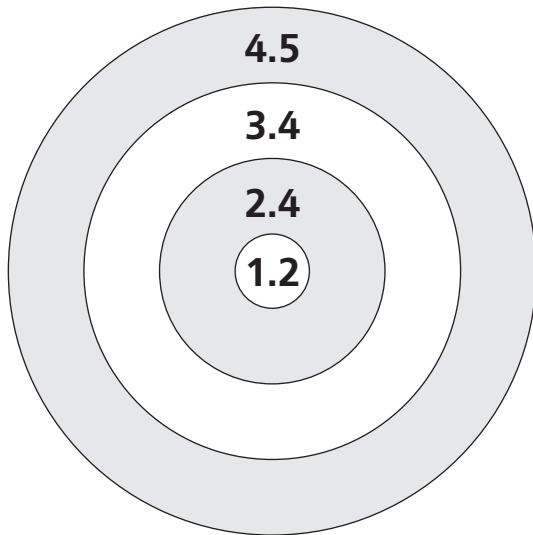
The 3 bags landed in
2 different rings.

His score was 12.4.

Erika threw 3 beanbags.


The 3 bags landed in
2 different rings.

Her score was 8.0.

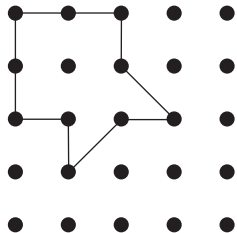


a. Which ring did neither of them hit?

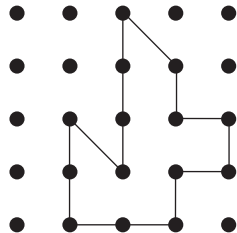
b. Write how you figured it out.



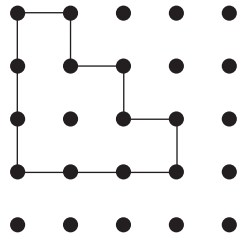
8



A



B



C

- Which two shapes have the same area?
- What is the area of both shapes in square units?

