

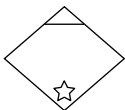
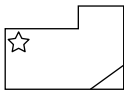


Thinking Mathematically and Problem Solving

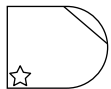
Sample Cards Purple

2


All of these are spinkies.



None of these are spinkies.



a. Which of these are spinkies?



A

B

C

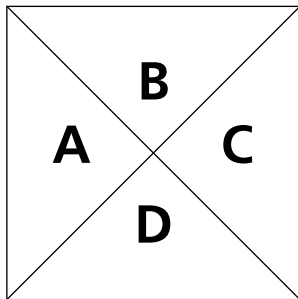
D

b. Describe a spinkie.



**Prickly
Problems**

"I can see 8 triangles hidden in the square."



- Use the letters to write a list of the triangles that you can see.
You can use more than one letter.
- Is Sara right?

