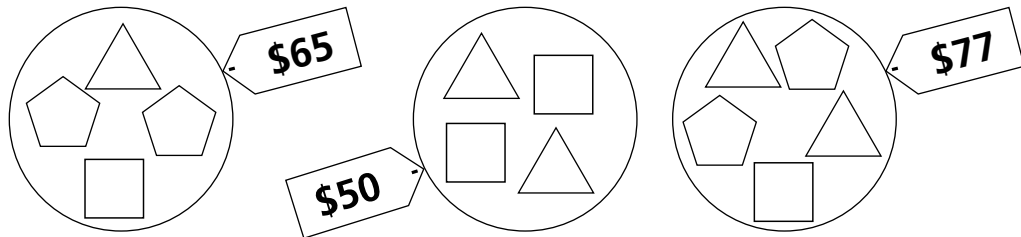


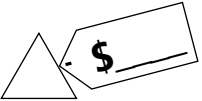
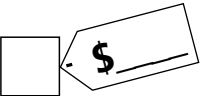
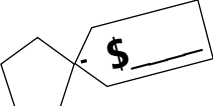


Thinking Mathematically and Problem Solving

Sample Cards Red



Same shapes cost the same amount.

- a. 
- b. 
- c. 



4

A store sells chairs with 4 legs and stools with 3 legs. There is a total of 58 legs and 16 seats in the store.

- How many chairs are there?
- How many stools are there?
- Write how you figured it out.

