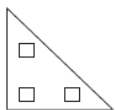


7

All of these shapes are quirks.



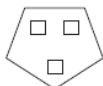
None of these shapes are quirks.



Which of these shapes are quirks?



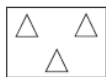
A



B



C



D

